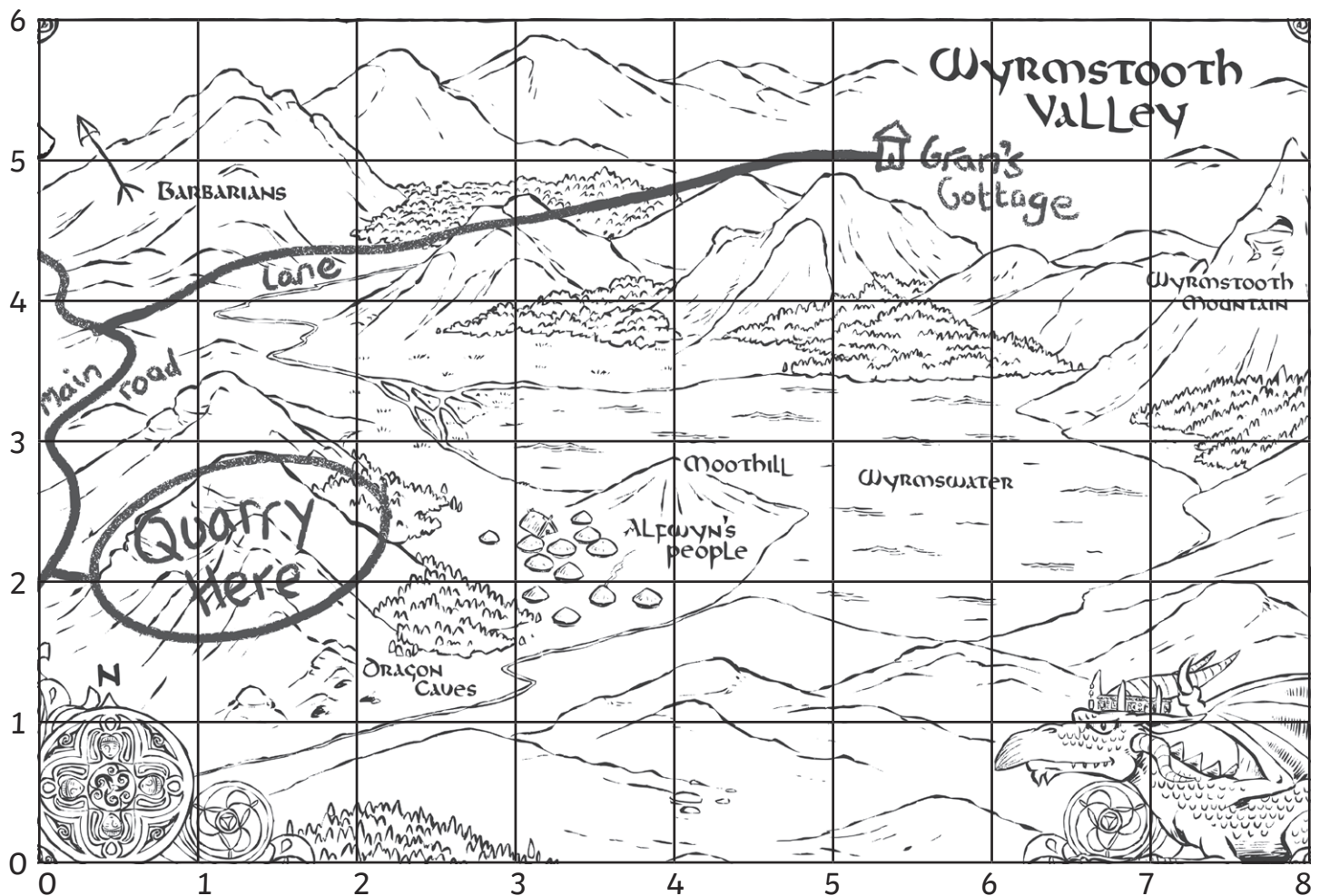


The Wurmstooth Valley Coordinates

This is Miranda's map of Wurmstooth Valley.



If you were standing at the following coordinates, where would you be?

The first one is done for you.

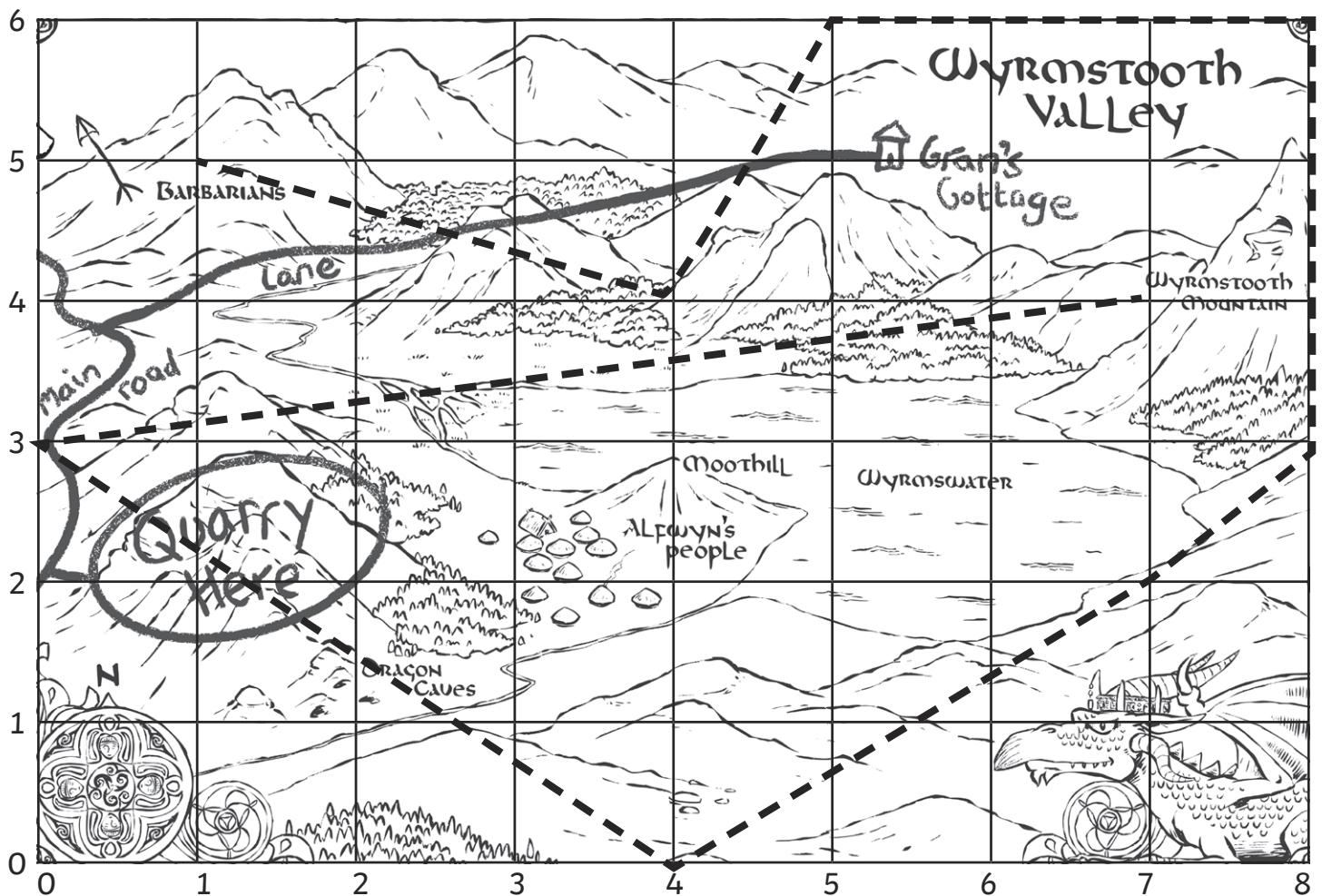
- (1,2) the quarry
- (5,5) _____
- (8,5) _____
- (4,3) _____
- (2,0) _____
- (2,1) _____

Guster the dragon is flying over the valley. See if you can draw his path on the map using a colour of your choice. Guster flies to these points, in this order:

(1,5) (4,4) (5,6) (8,6) (8,3) (7,2) (4,0) (0,3) (7,4)

The Wyrmostooth Valley Coordinates Answers

This is Miranda's map of Wyrmostooth Valley.



If you were standing at the following coordinates, where would you be?

The first one is done for you.

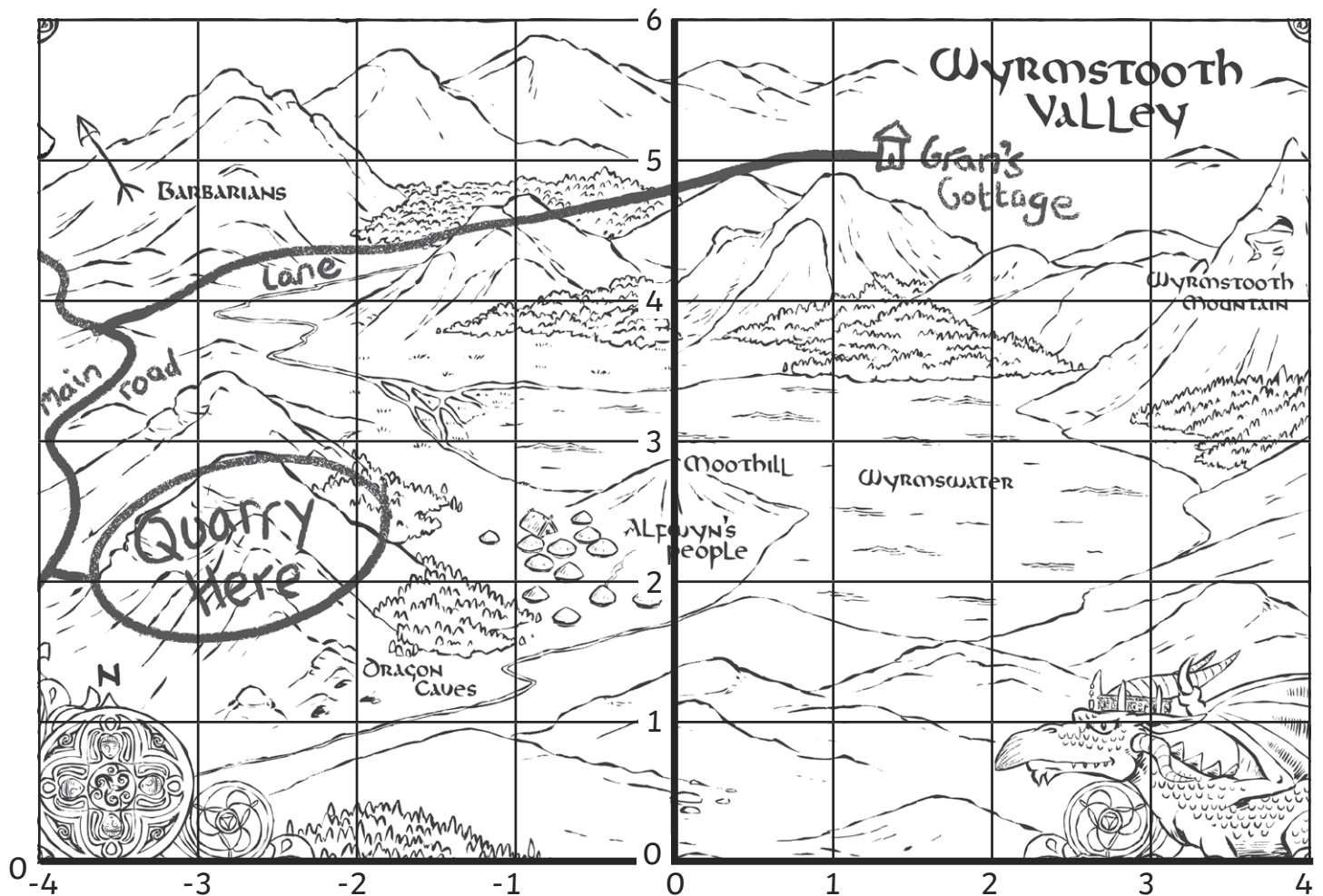
- (1,2) **the quarry**
- (5,5) **Gran's cottage**
- (8,5) **the top of Wyrmostooth Mountain**
- (4,3) **the top of the moot hill**
- (2,0) **the forest**
- (2,1) **the dragon caves**

Guster the dragon is flying over the valley. See if you can draw his path on the map using a colour of your choice. Guster flies to these points, in this order:

(1,5) (4,4) (5,6) (8,6) (8,3) (7,2) (4,0) (0,3) (7,4)

The Wurmstooth Valley Coordinates

This is Miranda's map of Wurmstooth Valley.



If you were standing at the following coordinates, where would you be?

The first one is done for you.

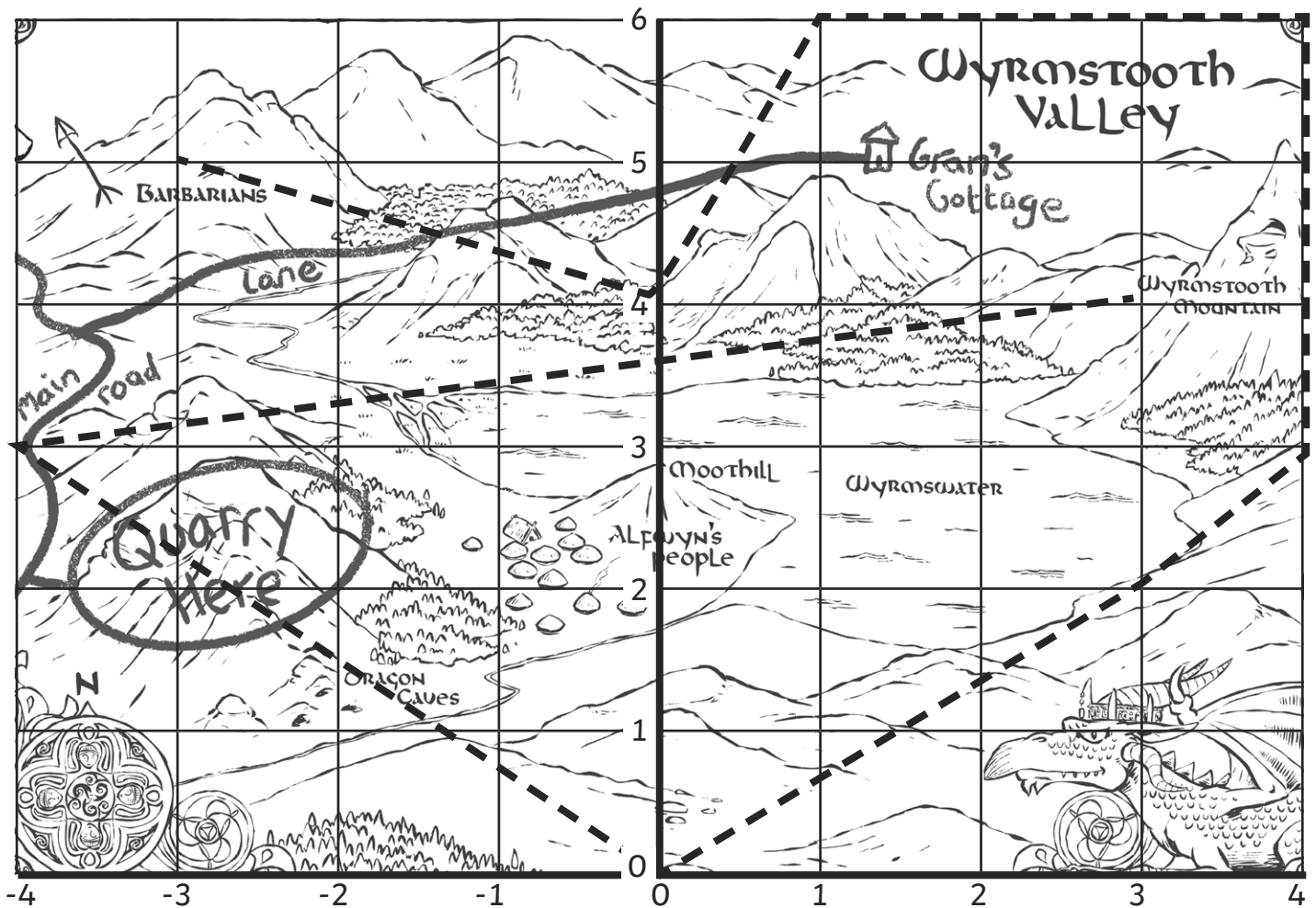
- $(-3,2)$ the quarry
- $(1,5)$ _____
- $(4,5)$ _____
- $(0,3)$ _____
- $(-2,0)$ _____
- $(-4,3)$ _____

Guster the dragon is flying over the valley. See if you can draw his path on the map using a colour of your choice. Guster flies to these points, in this order:

$(-3,5)$ $(0,4)$ $(1,6)$ $(4,6)$ $(4,3)$ $(3,2)$ $(0,0)$ $(-4,3)$ $(3,4)$

The Wurmstooth Valley Coordinates Answers

This is Miranda's map of Wurmstooth Valley.



If you were standing at the following coordinates, where would you be?

The first one is done for you.

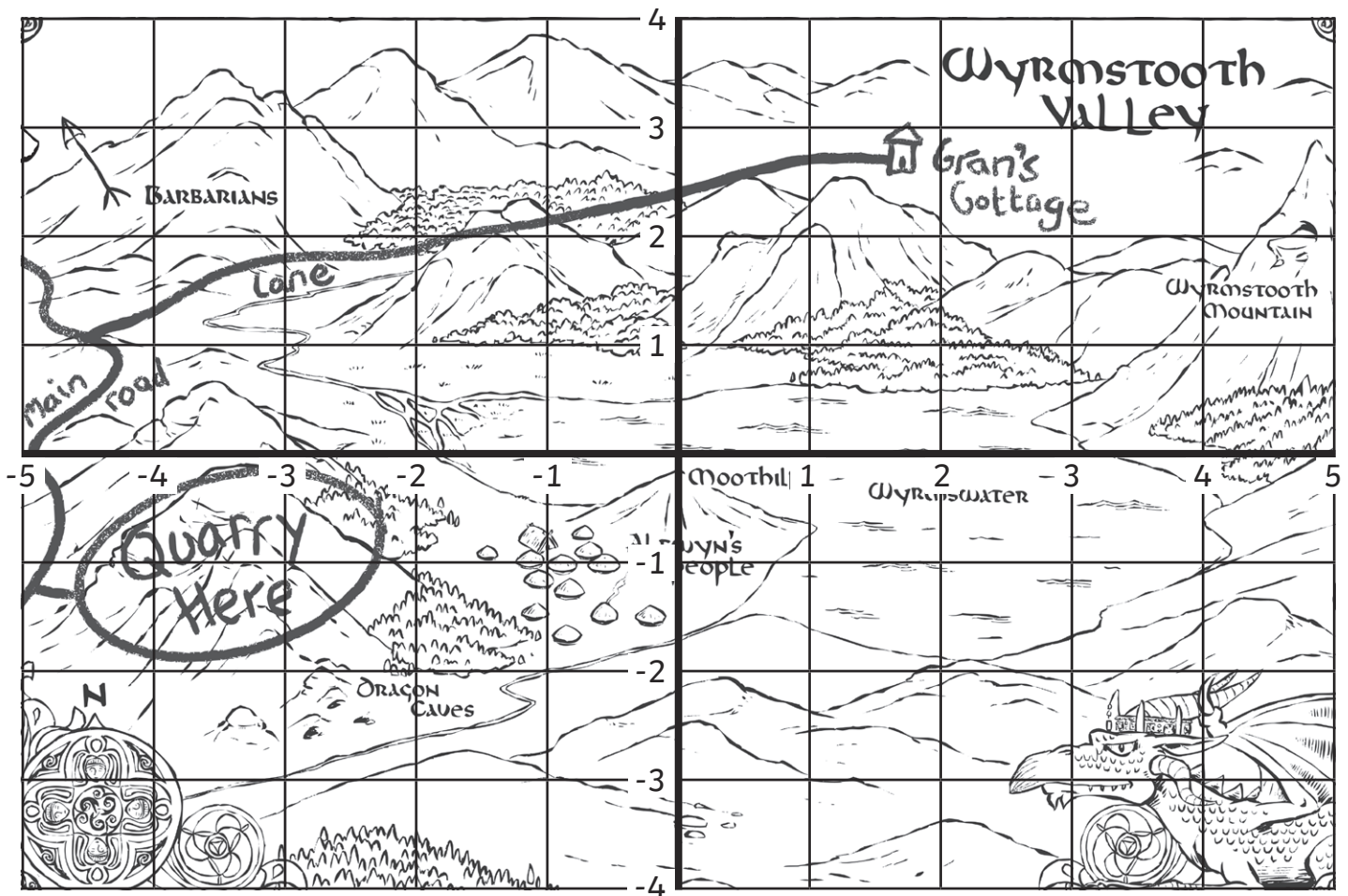
- (-3,2) **the quarry**
- (1,5) **Gran's cottage**
- (4,5) **the top of Wurmstooth Mountain**
- (0,3) **the top of the moot hill**
- (-2,0) **the forest**
- (-4,3) **the main road**

Guster the dragon is flying over the valley. See if you can draw his path on the map using a colour of your choice. Guster flies to these points, in this order:

(-3,5) (0,4) (1,6) (4,6) (4,3) (3,2) (0,0) (-4,3) (3,4)

The Wyrmostooth Valley Coordinates

This is Miranda's map of Wyrmostooth Valley.



If you were standing at the following coordinates, where would you be?

The first one is done for you.

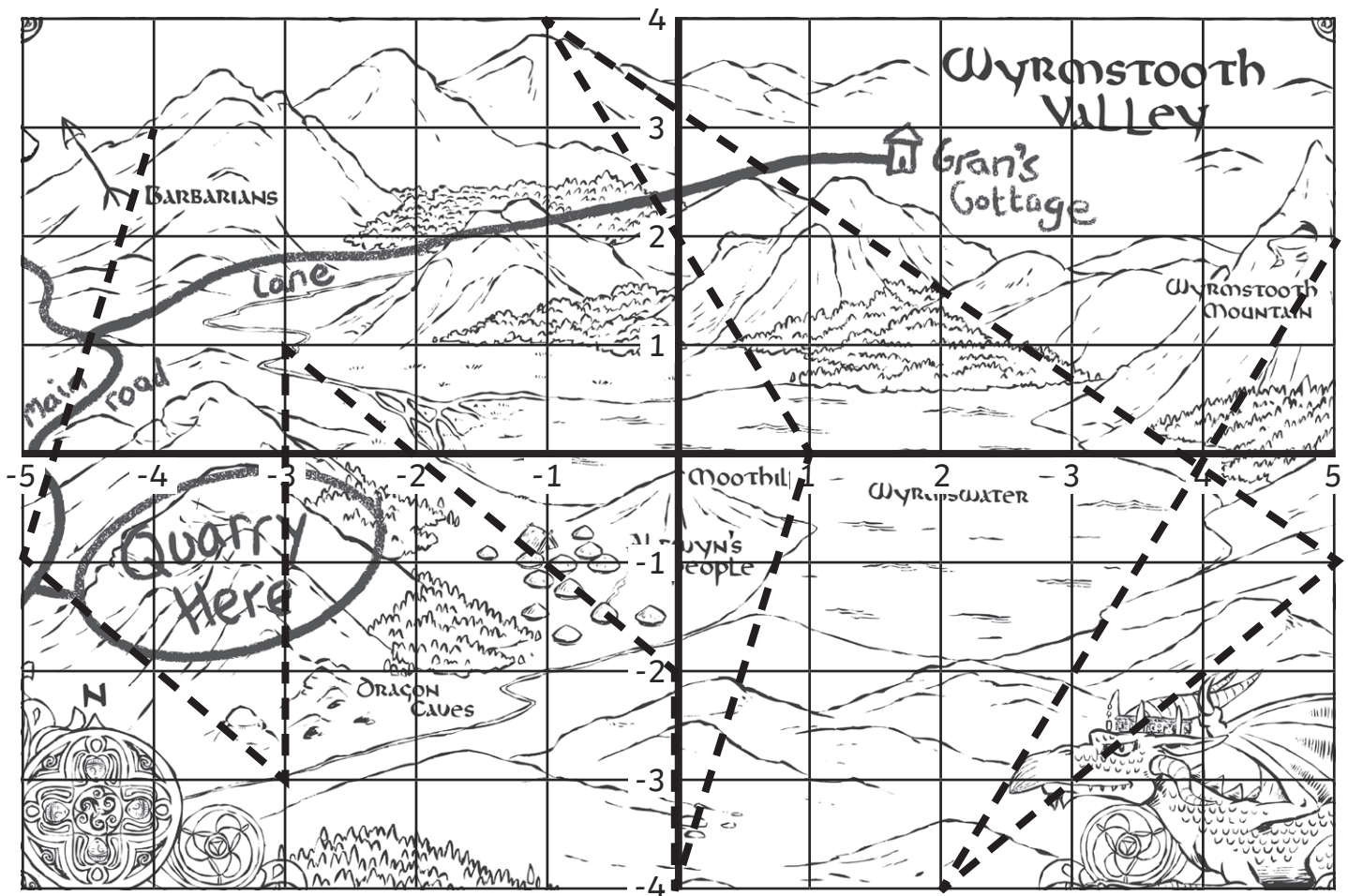
- $(-4, -1)$ the quarry
- $(2, 3)$ _____
- $(5, 2)$ _____
- $(0, 0)$ _____
- $(-2, -4)$ _____
- $(-5, 0)$ _____

Guster the dragon is flying over the valley. See if you can draw his path on the map using a colour of your choice. Guster flies to these points, in this order:

$(-4, 3)$ $(-5, -1)$ $(-3, -3)$ $(-3, 1)$ $(0, -2)$ $(0, -4)$ $(1, 0)$ $(-1, 4)$ $(5, -1)$ $(2, -4)$ $(5, 2)$

The Wyrmostooth Valley Coordinates Answers

This is Miranda's map of Wyrmostooth Valley.



If you were standing at the following coordinates, where would you be?

The first one is done for you.

- $(-4, -1)$ **the quarry**
- $(2, 3)$ **Gran's cottage**
- $(5, 2)$ **Wyrmostooth Mountain**
- $(0, 0)$ **the top of the moot hill**
- $(-2, -4)$ **the forest**
- $(-5, 0)$ **the main road**

Guster the dragon is flying over the valley. See if you can draw his path on the map using a colour of your choice. Guster flies to these points, in this order:

$(-4, 3)$ $(-5, -1)$ $(-3, -3)$ $(-3, 1)$ $(0, -2)$ $(0, -4)$ $(1, 0)$ $(-1, 4)$ $(5, -1)$ $(2, -4)$ $(5, 2)$